

Class-II
Student Name: _____ Sec _____ Roll No. _____ Subject: EVS
Date: _____

LS- 11 Plants around us

PLANTS AROUND US

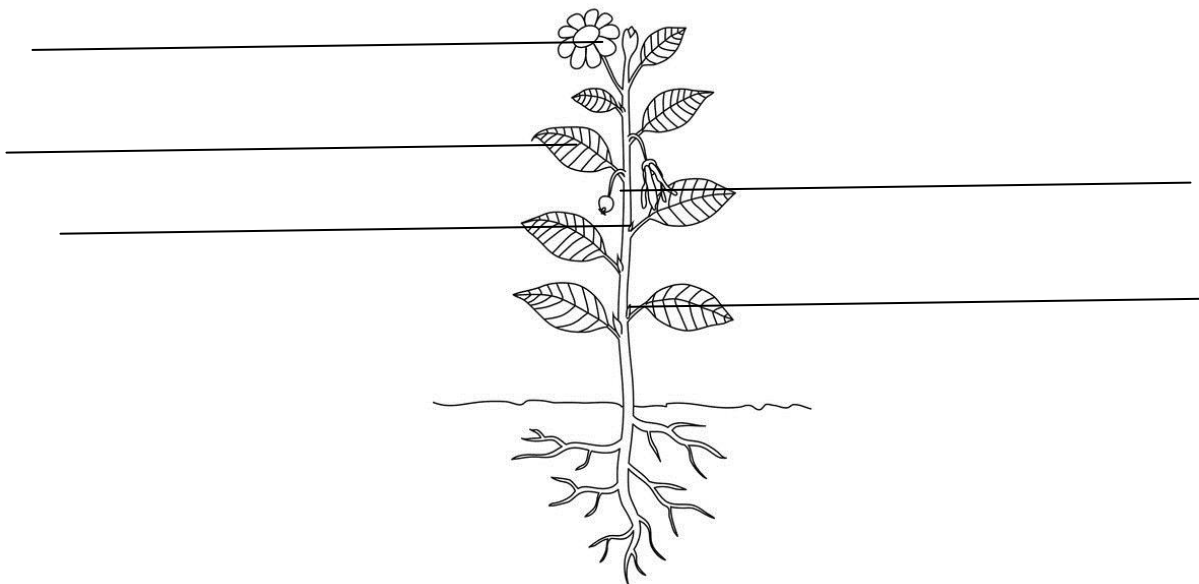
I. Flow chart





II. Fill in the blanks.

1. Shrubs are _____ plants.
2. Trees have several _____.
5. _____ hold the plant firmly in the ground.
6. Some flowers also have a sweet juice called _____ inside them.
7. Green leaves are a plant's _____ factories.

III. Name and label the parts of a plant.



IV. Draw and name a creeper and a leaf.



V. Circle the odd one .

- | | | | |
|--------------|--------|-------|---------|
| 1. flower | fruit | bud | root |
| 2. medicines | cotton | glass | wood |
| 3. herb | shrub | wall | climber |

VI. Choose the correct answers.

1. Plants gives us _____
a. meat b. vegetables c. eggs
2. We get wood for making _____
a. soaps b. oil c. furniture
3. Flowers of many plants change to _____
a. seeds b. fruits c. roots

VII. Name any two.

1. Types of plants that grow in water

2. Parts of a plant

3. Things we get from animals

VIII. Answer to following in short.

Q1. What does the stem bear?

Ans. _____

Q2. What does a plant need to grow?

Ans. _____

IX. Answer the following.

Q1. How do plants help our environment? Write any two

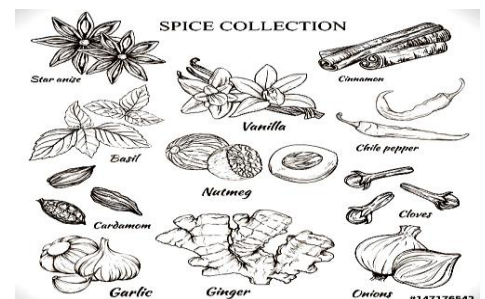
Ans. _____

Q2. What are the functions of roots?

Ans. _____

X.1. a. Identify the picture: _____


b. What adds flavor to the food we eat?



2. Name the products given by these plants.









XI. Underline the correct word.

1. [Paper / egg] is made from the bamboo plants.
2. [Rubber / fiber] is used to make cloth , bags etc.
3. We should not [pluck / write] flowers on plants and trees.
4. Leaves help the plant to [breathe / read] as it grows.

LS- 12. Animals round us

I. Fill in the blanks.

1. Animals like cow and horse eat _____
2. People have dog cat and parrot as _____
3. The place where an animal lives is called its _____
4. Insects have six legs that help them _____

II. Match the following.

- | | |
|-----------------------|----------------|
| 1. Lives in trees | a. milk |
| 2. Lives in shed | b. birds |
| 3. Dogs and cats | c. sheep |
| 4. cows and buffaloes | d. pet animals |



III. Circle the odd one.

- | | | | |
|----------|----------|-------|--------|
| 1. lion | elephant | tiger | rabbit |
| 2. zebra | ducks | swans | fish |

IV. Choose the correct answer.

1. A spider lives in a _____
a. hole b. web c. burrow
2. Horse lives in a _____
a. shed b. coop c. stable
3. Mouse and _____ live in a hole.
a. snake b. cheetah c. dog

V. Draw two things we get from animals.



VI. Name any two

- 1. pet animals _____
- 2. wild animals _____
- 3. birds _____

VII. Answer the following in short.

1. What does a parrot eat?

Ans. _____

2. How should we take care of pet animals?

Ans. _____

Q3. Why do animals move?

Ans. _____


VIII. Write yes or no.

1. Fish and dolphins live in river. []
2. Animals move to escape from their enemies. []
3. Ducks and swans live near and in water. []
4. The animals do not change as it grows. []


IX. Give two examples of each:

1. Plant eating animals: _____ , _____
2. Flesh eating animals: _____ , _____
3. Circle the product which we do not get from milk.
a. cheese b. ghee c. honey d. curd

Q2. Draw the life cycle of the butterfly.



X. Name the following animals:



LS- 13 How we travel

I. Fill in the blanks.

1. We need _____ to go from one place to another.
2. _____ fly in the air and take us to faraway places.
3. Ships carry people across the _____
4. Bicycles and scooters are the most common means of transport on _____
5. A horse driven cart is called a _____

II. Match the following.

- | | | | |
|----------------------|-------------------------|---|---|
| 1. bullock carts | are in big cities. | [|] |
| 2. vehicles | are used in villages | [|] |
| 3. ships | are used to carry goods | [|] |
| 4. In deserts camels | water transport | [|] |



III. Cross the odd out.

- | | | | |
|-----------------|------------|--------------|------------|
| 1. car | boat | train | tractor |
| 2. cycle | scooter | bus | motorcycle |
| 3. bullock cart | camel cart | tonga | lorry |
| 4. helicopter | aeroplane | bullock cart | rocket |

IV. Choose the correct word.

1. Carts are driven by _____
 a. animals b. engine c. fuel
2. _____ are used to transport goods from one to another.
 a. truck b. carts c. cars
3. _____ carry people and goods across water
 a. boat b. bus c. rickshaw

V. Draw any two means of transport-



VI. Name any two:

- 1. vehicles which run on engines _____ , _____
- 2. water transport _____ , _____
- 3. land transport _____ , _____

VII. Answer in short-

- Q1. Why do we need transport?
- Q2. Why should we use horn less often?

Ans. _____

VIII. Long question /answers

- Q1. What are the most common means of transport?

Ans. _____





Q2. Why should we walk or cycle to nearby places?

Ans. _____


IX. Write true or false.

- 1. Helicopters are used to travel for short distances []
- 2. People travel by car on the river. []
- 3. We can walk to near by places. []
- 4. To move on land all vehicles need wheels. []

X. Name the following.



IV. Identify the following pictures and name them.



V. Name any two-

1. Types of mass communication _____, _____

2. Recreation for communication _____, _____

VI. Answer in short-

Q1. Why do we communicate with each other?

Ans. _____

Q2. How is internet useful?

Ans. _____

VII. Answer the following.


Q1. How is a smart phone very useful to us?

Ans. _____

Q2.What are the different kinds of phone?

Ans. _____

VIII. Draw any one means of communication-



IV. Write true or false-

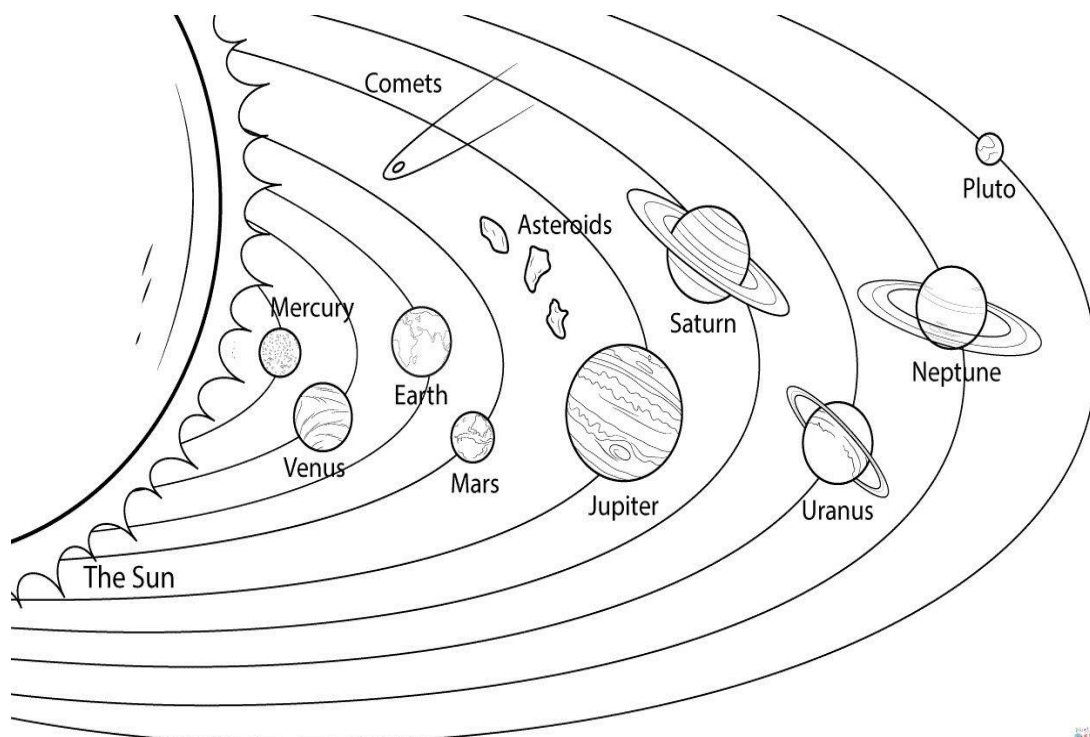
1. The sun never changes []
2. The moon changes its shape daily. []
3. The sun is a huge ball of fire. []
4. We can see in the dark. []

V. Name any two-

1. objects seen in the sky at night

2. seasons

VI . Draw the planets given.



VII. Answer in short

Q1. What is the sun?

Ans. _____

Q2. What is a solar system?

Ans. _____

Q3. When does it become night?

Ans. _____


Q3. What is a full moon?

Ans. _____

VIII. Fill in the missing word.

1. Ripen the fr ____ i t s.

2. Helps plants to make f o ____ d



3. Kills the g e r ____ s

4. Dries w ____ t clothes.

IX. Draw sun moon and stars.

A large empty rounded rectangular box for drawing. The box is outlined with a simple black line and has rounded corners. It is intended for the student to draw a sun, moon, and stars.