

Class-III

Subject: Computer

Student Name: _____

Sec _____

Roll No. _____ **Date:** _____

A: Tick the correct the answer:

1. _____ is the lead developer and designer of TUX Paint.

a. Bill gates b. Dr. Engelbart c. Bill Kendrick d. Tim Berners Lee
2. Tux paint is an award winning free software for children with many _____ features.

a. Creative b. Funny c. Interesting d. All
3. Which tool is quite similar to the paint tool?

a. Lines tool b. Stamp tool c. Brush tool d. None
4. The toolbox has a total of _____ different tools.

a. 18 b. 15 c. 14 d. 12
5. Which tool is used to give a blur effect on the picture.


a. Blocks b. Blur c. Haze d. All
6. We have _____ fixed colors and 1 choice color in Tux paint.

a. 15 b. 20 c. 16 d. 17
7. Tux Paint gives us an option to draw beautiful patterns using the _____ tool.

a. Shape b. Magic c. Paint d. None
8. We can use the _____ tool to draw and give amazing effects to a picture.

a. Open b. Brush c. Paint d. Magic
9. The grass effect is present in the _____ tool.

a. Flower b. Magic c. Fill d. Stamp
10. Identify the tool that lets you draw shapes in Tux Paint.



B. Answer the following questions:

Q1. Where is the toolbar present in a Tux program?

A: _____

Q2. What is the use of Colors?

A: _____

Q3. What is Stamp tool?

A: _____

Q4. How can we open Tux Paint program?

A: _____

Q5. Where can we find the Magic tool in Tux?

A: _____

Q6. Name any three sub-tools of the Magic tool.

A: _____

Q7. What is Tux Paint?

A: _____

C. Unscramble the jumbled words.

1. HAPSES : _____

2. TAPSMS : _____

3. RASERE : _____

4. WNE : _____

D. Match the following tools with their names.

1. Eraser tool



2. Magic tool



3. Shape tool



4. Stamp tool



5. New tool



I. Answer the following questions.

1. What is logo?

Ans: _____

2. How can we close the logo program?

Ans: _____

3. How can we open the logo program?

Ans: _____

4. What is the use of HOME command?

Ans: _____

5. What is the difference between the PENUP and PENDOWN commands?

Ans: _____

6. In which part of the window does the turtle move?

Ans: _____

7. Which two commands only rotate the turtle's head?

Ans: _____

8. How does the turtle draw a line?

Ans: _____

9. Write the steps to move the turtle forward by 100 steps?

Ans: _____

10. In which direction does the turtle move?

Ans: _____



II. Write the short form and what does the turtle do?

COMMAND	SHORT FORM	ACTION
SHOWTURTLE		
HIDETURTLE		
FORWARD		
BACK		
RIGHT		
LEFT		
CLEARSCREEN		

PENUP		
PENDOWN		
HOME		

III. Write the commands for to draw a square?

IV. Write the commands to make a triangle ?



V. Name the parts of LOGO window:

