

Class-IV

Subject: Computer

Student Name: _____

Sec _____

Roll No. _____ Date: _____

I. Tick the correct answer.

1. The logo window is divided into parts?
a) 1 b) 2 c) 3 d) 4
2. The Upper window in LOGO is used to?
a) Write the commands c) execute the commands
b) Display Graphics d) To display the command list
3. The lower window in logo is used to?
a) Display the Graphics b) Write the commands
c) Display the turtle d) none
4. The lower window in logo is used to/
a) Pointer b) Turtle c) Tortoise d) Triangle
5. The command window has how many sections?
a) 1 b) 2 c) 3 d) 4
6. The command in logo are case sensitive?
a) True b) false
7. By default what is the color of lines draw by turtle?
a) Red b) Green c) Black d) blue
8. Correct the Error in Fd50?
a) FD_50 b) Fd-50 c) FORWARD-50 d) FD 50
9. In how many directions turtle can move?
a) 2 b) 4 c) 6 d)8
10. Which command is used to clear the graphic screen?
a) CS b) CLEARSCREEN C) Both d) none
11. Which command is used to return the turtle to its starting position?
a) LT b) RT c) MOVE d) HOME
12. Which command is used to clear the command window?
a) CS b) CLEARSCREEN C) CLEARTEXT d) All of the above

13. Which command is used to hide the turtle?

- a) HIDE b) HIDETURTLE c) HT d) Both (ii) and (iii)

14. Which command is used to show turtle?

- a) SHOW b) SHOWTURTLE c) ST d) Both (ii) and (iii)

II. Answer the following questions.

Q1. What can be displayed using the PRINT command?

A: _____

Q2. What commands will you give to multiply 20 with 10?

A: _____

Q3. What command will you give to subtract 16 from 20?

A: _____

Q4. Write the procedure to draw a simple rectangle whose length and breadth are 40 and 25 units respectively.

A: _____

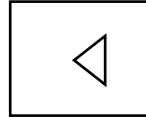
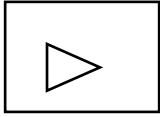
Q5. Write the process to save a procedure.

A: _____

Q6. What are the Arithmetic operators in LOGO?

A: _____

III. Write the Logo commands for the following :



IV. Write the commands for performing these calculations:

1. $5 + 9$ _____

2. $45 - 35$ _____

3. $26 * 5$ _____

4. $42/6$ _____

V. Write the output of the commands that appear after typing them on MSW. LOGO.

1. Print [I LIKE TO DRAW ON LOGO] _____

2. PRINT 12+5 _____

3. PRINT 75-60 _____

VI. Write the full form of the following shortcut commands:

a) PU _____

b) PE _____

Ls.8,9

I. Answer the following questions?

1. How can we open a power point presentation in our computer?

Ans: _____

2. How can we save a power point presentation?

Ans: _____

3. What is internet?

Ans: _____

4. What are the advantages of e-mail?

Ans: _____

5. How can we search for any information on internet?

Ans: _____

6. Write steps to insert an image from my documents into the presentation?

Ans: _____

7. Give any three uses of internet?

Ans: _____

8. What is the full form of e-mail?

Ans: _____

9. Sheena wants to know the number of slides in the presentation on which she is working.

How can she find that?

Ans: _____

10. What is a slide?

Ans: _____

11. How many types of rulers we have? Why we are using them?

Ans: _____

12. What is the full form of www?

Ans: _____

13. What is the full form of wifi? Why we use wifi?

Ans: _____

II. Unscramble the words using the clues given below.

a) This bar is located on top of the window and below the tile bar,

RIONBB _____

b) It has Undo, Redo and Save commands.

QUICK ACCSES TOLOBAR _____

c) This is located on the top most of the power point window.

THE TILTE BAR _____

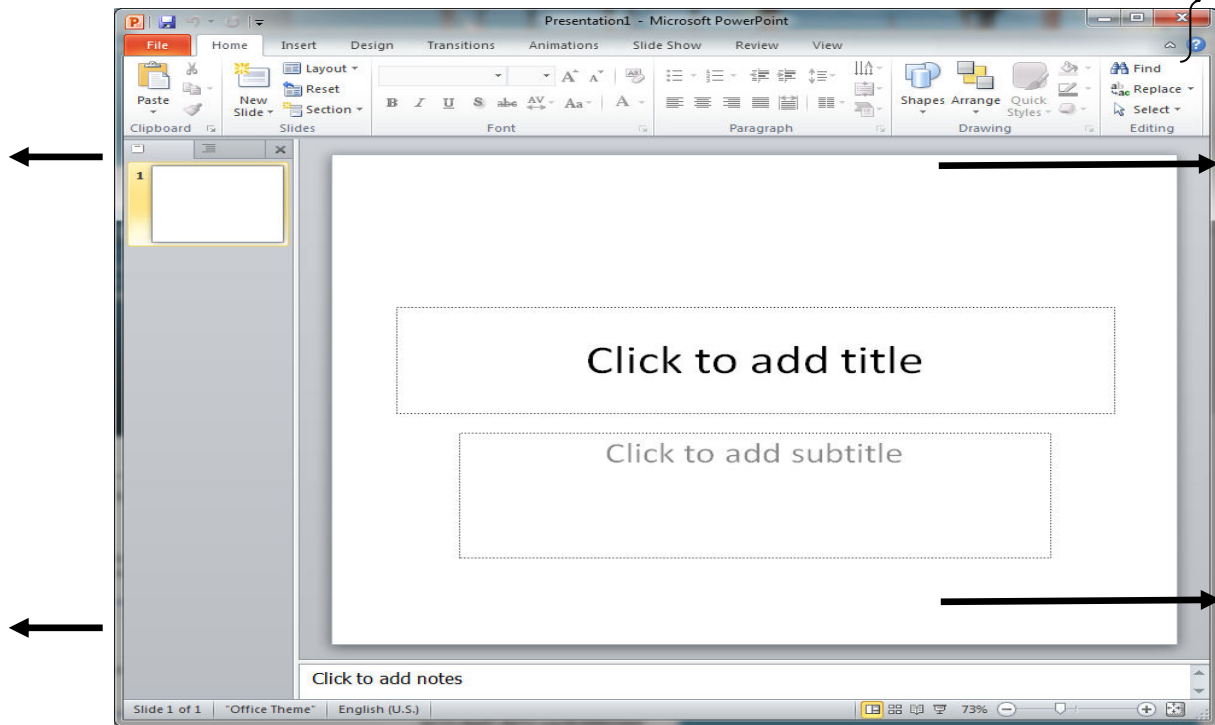
d) This is located on the bottom of the window.

STAUTS BAR _____

e) Boxes where you can either type text or insert clipart or pictures and charts as required.

PACELHLODES _____

II. Label the parts of the Power point window



III. Guess the correct word for the statements given below:

1. A software used to create presentations.

2. The tab which includes various themes.

3. The bar that appears at the bottom of the window.

4. The shortcut used to run the presentation.

IV. Identify and write the name of the picture:

